









Name _____

Date _____

Teachtopia Dice Math

Addition of Three Dice

- Steps:** 1. Roll the three dice.
2. Write the Face Values
3. Add the three numbers in a number sentence.

| Three Dice Rolled | Number Sentence |
|--|--|
| Example Drawing  | Number Sentence from Dice $\boxed{2} + \boxed{2} + \boxed{5} = 9$ |
|  | $\square + \square + \square =$ |
|  | $\square + \square + \square =$ |
|  | $\square + \square + \square =$ |
|  | $\square + \square + \square =$ |
|  | $\square + \square + \square =$ |
|  | $\square + \square + \square =$ |
|  | $\square + \square + \square =$ |