









Name _____

Date _____

Teachtopia Dice Math

Addition of Two Dice

- Steps:** 1. Roll two Dice.
2. Write the Face Values
3. Add the two numbers in a number sentence.

Two Dice Rolled	Number Sentence
Example Drawing 	Number Sentence from Dice $\boxed{2} + \boxed{5} = 7$
	$\square + \square =$
	$\square + \square =$
	$\square + \square =$
	$\square + \square =$
	$\square + \square =$
	$\square + \square =$
	$\square + \square =$